

**අධ්‍යාපන අමාත්‍යාංශය**  
**கல்வி அமைச்சு**  
**Ministry of Education, Sri Lanka**

41	E	I
----	---	---

**අ. පො. ස. සාමාන්‍ය පෙළ විභාගය - උපකාරක සම්මන්ත්‍රණ මාලාව - 2022 (2023)**  
கல்விப் பொதுத் தராதரப் பத்திர )சாதாரண தரப் பரீட்சை- ஆதரவு கருத்தரங்கு தொடர் - 2022 (2023)  
**G. C. E. Ordinary Level Examination - Support Seminar Series - 2022 (2023)**

සංගීතය (අපරදීග)	I,II
சங்கீதம்(மேலைத்தேய)	I,II
Music (Western)	<u>I,II</u>

**පැය තුනයි.**  
**மூன்று மணித்தியாலம்**  
**Three Hours**

අමතර කියවීමේ කාලය - මිනිත්තු 10 යි.  
மேலதிக வாசிப்பு நேரம் 10 -நிமிடங்கள்  
Additional Reading Time - 10 minutes

**Use additional reading time to go through the question paper, select the questions you will answer and decide which of them you will priorities.**

### Music (Western) II

**සැලකිය යුතුයි/முக்கியம்/Notes :**

- \* සියලු ම ප්‍රශ්නවලට පිළිතුරු සපයන්න. මෙම පත්‍රය සඳහා ලකුණු 40ක් හිමි වේ.  
**எல்லா வினாக்களுக்கும் விடை தருக.**  
Answer all Questions.
- \* අංක 1 සිට 40 කෙක් ප්‍රශ්නවල, දී ඇති (1), (2), (3), (4) පිළිතුරුවලින් නිවැරදි හෝ වඩාත් ගැළපෙන හෝ පිළිතුර කෙරෙන්න.  
1 தொடக்கம் 40 வரையுள்ள ஒவ்வேடு வினாவிலும் (1), (2), (3), (4) என எண்ணிலப்பட்ட விடைகளில் தரரியான அல்லது மிகப் பொருத்தமான விடையைத் தெரிவுசெய்க.  
From each of the questions 1 to 40, pick on of the alternatives (1), (2), (3), (4) which you consider is correct or most appropriate.
- \* මබව සැපයෙන පිළිතුරු පත්‍රයේ එක් එක් ප්‍රශ්නය සඳහා දී ඇති කව අකුරෙන්, මබ කෙරෙහි පිළිතුරෙහි අංකයට සැසඳෙන කවය තුළ (X) ලකුණ යොදන්න.  
**உமக்கு வாலங்கப்பட்டுள்ள விடைத்தாளில் இவ்வொரு வினாவுக்கும் உரிய வள்ளங்களில் உமது விடையின் இலக்கத்தை ஒத்த மட்டத்தினுள்ளே புள்ளடியை (X) இடுக.**  
Mark a Cross (X) on the number corresponding to your choice in he answers sheet provided.
- \* එම පිළිතුරු පත්‍රයේ පිටුපස දී ඇති අනෙක් උපදෙස් ද සැලකිල්ලෙන් කියවා, ඒවා පිළිපදින්න.  
விடைத்தாளில் மறுபக்கத்தில் தரப்பட்டுள்ள மற்றைய அறிவுறுத்தல்களையும் கவனமாக வாசித்து அவற்றைப் பின்பற்றுக.  
Further instructions are given on the back of the answer sheet. Follow them carefully.


1. Which of the following is the corresponding Time-Signature of  $\frac{4}{4}$ ?

(1)  $\frac{4}{8}$

(2)  $\frac{2}{2}$

(3)  $\frac{12}{8}$

(4)  $\frac{12}{4}$

2. Which of the following is equal in value to the 2<sup>nd</sup> dot of the given note? 

(1) Demi semi quaver

(2) Semi quaver

(3) Crotchet

(4) Quaver

3. What is the letter name of the circled note?



(1) B

(2) B<sup>b</sup>

(3) D

(4) D<sup>b</sup>

4. Which of the following is the enharmonic equivalent of B double sharp?

(1) A

(2) B

(3) B<sup>#</sup>

(4) D<sup>b</sup>

5. Which of the following accidentals is used to raise a flattened note?

- (1) Natural                      (2) Sharp                      (3) Double sharp                      (4) Double flat

6. Which of the following is the Key-signature of E major?

- (1)  (2)  (3)  (4) 





7. Which of the following is the lower tetrachord of D major?

- (1) D, E, F, G                      (2) A, B, C#, D                      (3) D, E, F#, G                      (4) A, B, C, D

8. What is the tonic minor of G major?

- (1) D minor                      (2) E minor                      (3) F minor                      (4) G minor

9. Which of the following is a Concordant interval?





- (1)  (2)  (3)  (4) 

10. Which of the following ornament signs represents the given notation?



- (1)  (2)  (3)  (4) 

11. Which of the following triads is the 2<sup>nd</sup> inversion of the subdominant triad in F major?

- (1)  (2)  (3)  (4) 

12. Which of the following is the correct chord indication for the given triad?



(1)  $V_4^6$

(2)  $I_4^6$

(3)  $V_3^6$

(4)  $I_3^5$

13. Which of the following pair of terms has the opposite meaning?

- (1) Da Capo - Dal Segno                      (2) Piu mosso - Meno mosso  
(3) Allegro - Presto                      (4) Adagio - Grave

14. Which of the following is the English meaning of the Italian term, *Alla marcia*?

- (1) Duple in minim beats                      (2) At the performer's pleasure  
(3) From the beginning                      (4) In the style of a march

15. Which of the following melodies is written one octave lower of the given notation?



- (1) (2) (3) (4)

16. Which of the following instruments sounds a major 2<sup>nd</sup> lower than the written note?

- (1) Horn in F (2) Trumpet in B<sup>b</sup> (3) Clarinet in E<sup>b</sup> (4) Flute

17. Which of the following is the frequency of the given note?



- (1) 440Hz (2) 256Hz (3) 880 Hz (4) 512 Hz

18. Which illustrates the way the given note is played?

- (1) (2) (3) (4)

19. Which of the following would be the Dominant chord of C minor?

- (1) (2) (3) (4)

20. Which of the following is an interrupted cadence?

- (1) (2) (3) (4)

21. Which of the following compositions is in Rondo form?

- (1) Ash grove (2) Prelude No. 1-Bach  
(3) Fur Elise - Beethoven (4) Harmonious Blacksmith-Handel

22. Which of the following is known as the episodic form?

- (1) Binary (2) Ternary (3) Sonata (4) Variation

23. Which animal's traits are described in 'Gajaga Vannama'?

- (1) Eagle (2) Horse (3) Elephant (4) Peacock

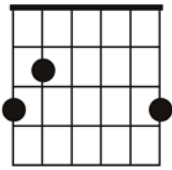
24. Which of the following is a correct statement?

- (1) Tone is the shortest distance between two notes.
- (2) The Enharmonic Equivalent of the tuning note of the orchestra is G double sharp
- (3) Diatonic semitone contains notes with the same letter names
- (4) Chromatic semitone contains different letter names.

25. Which of the following Musicians are associated with Sri Lankan light songs?

- (1) Lakshmi Bhai, Ellen Ratnayake
- (2) Ananda Samarakoon, Sunil Shantha
- (3) Clarence Wijewardhana, Rookantha Gunethilaka
- (4) Philippu Singho, C Don Bastian

26. Which of the following chords is indicated by the given guitar chord diagram?



- (1) G major
- (2) E minor
- (3) C major
- (4) F major

27. Which of the following Oriental notation is equal to the mediant and 'Ti' of G Harmonic minor respectively?

- (1) ४', ॐ'
- (2) ८', ७'
- (3) ८, ७
- (4) ५, ॐ'

28. Which of the following groups of instruments consist only definite pitch percussion instruments?

- (1) Tabular Bells, Gong
- (2) Triangle, Cymbal
- (3) Timpani, Xylophone
- (4) Side Drum, Timpani

29. Hautbois is,

- (1) a transposing, single reed instrument.
- (2) a transposing, double reed instrument
- (3) a non-transposing, double reed instrument
- (4) a non-transposing, single reed instrument

30. Which of the following instruments uses a slide to change notes?

- (1) Tuba
- (2) French Horn
- (3) Trumpet
- (4) Trombone

31. Which of the following set of instruments is used by the front row of a typical jazz band?

- (1) Trumpet, Trombone, Clarinet
- (2) Trombone, French horn, Piccolo
- (3) Trumpet, Clarinet, Flute
- (4) Clarinet, Piano, French horn

32. Which of the following is often a setting of a sacred story for soloists, chorus, and orchestra?

- (1) Symphony
- (2) Oratorio
- (3) Opera
- (4) Concerto

33. Which of the following works is performed by a chamber group?

- (1) Trout quintet
- (2) Trumpet concerto
- (3) 1812 overture
- (4) Surprise symphony

34. Which of the following composers was associated with the transition from the classical to the Romantic period?

- (1) Haydn                      (2) Beethoven                      (3) Schubert                      (4) Mendelssohn

35. Which group consists only of Modern Composers?

- (1) Bela Bartok, Gershwin, Stravinsky                      (2) Bach, Handel, Schubert  
(3) Beethoven, Mozart, Haydn                      (4) Wagner, Brahms, Ravel

36. Which of the following best describes Mendelssohn's 'Song Without Words'?

- (1) It is an Oratorio                      (2) It is an opera  
(3) It is a piano piece                      (4) It is a lied

37. Which of the following compositions can be described as "programme music"?

- (1) Beethoven's Pastoral Symphony                      (2) Stravinsky's Rite of Spring  
(3) Gershwin's Rhapsody in Blue                      (4) Britten's Young Person's Guide to the Orchestra

38. Which of the following is found in jazz music?


- (1) Syncopation                      (2) Contrapuntal                      (3) Alberti bass                      (4) Rubato

39. Which of the following musicals includes the song 'Edelweiss' ?

- (1) Singing Nun                      (2) My Fair lady                      (3) Sound of Music                      (4) Mary Poppins

40. Which of these rhythms would match the given words?

*"Yesterday all my troubles seemed so far away, Now it looks as though they're..."*



\*\*\*\*\*